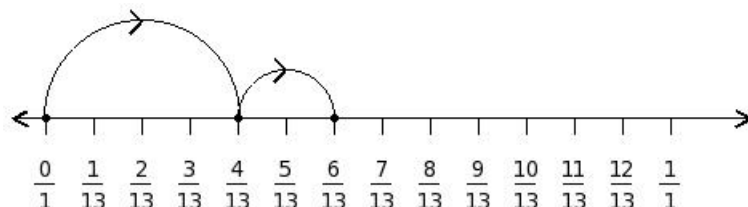


EduSahara™ Learning Center Assignment

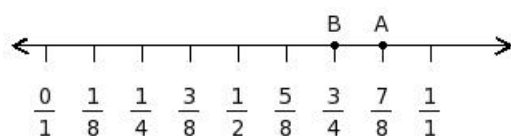
Grade : Class VI, ICSE
Chapter : The Number Line
Name : Fraction Number Line
Licensed To : Teachers and Students for non-commercial use

1. Find the equation representing the following number line diagram



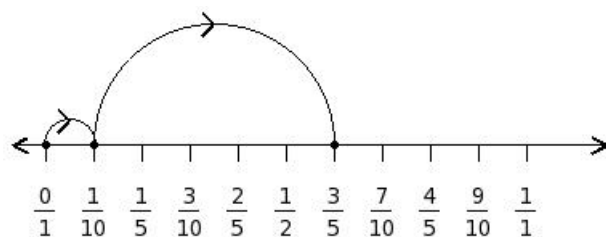
- (i) $\frac{5}{13} + \frac{4}{13} = \frac{9}{13}$ (ii) $\frac{4}{13} - \frac{5}{13} = \left(\frac{-1}{13}\right)$ (iii) $\frac{3}{13} + \frac{2}{13} = \frac{5}{13}$
 (iv) $\frac{4}{13} + \frac{2}{13} = \frac{6}{13}$ (v) $\frac{6}{13} - \frac{2}{13} = \frac{4}{13}$

2. Find the difference between the values of numbers at point A and B



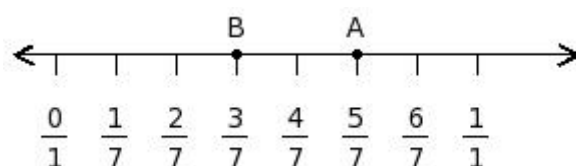
- (i) $\frac{1}{10}$ (ii) $\left(\frac{-1}{8}\right)$ (iii) $\frac{1}{8}$ (iv) $\frac{3}{8}$ (v) $\frac{1}{6}$

3. Find the equation representing the following number line diagram



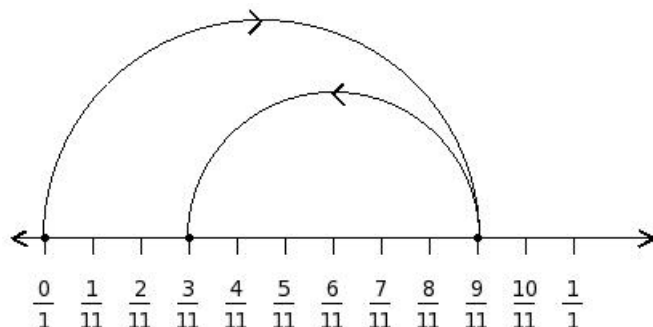
- (i) $0 + \frac{1}{2} = \frac{1}{2}$ (ii) $\frac{1}{5} + \frac{7}{10} = \frac{9}{10}$ (iii) $\frac{1}{10} - \frac{4}{5} = \left(\frac{-7}{10}\right)$
 (iv) $\frac{3}{10} - \frac{1}{2} = \left(\frac{-1}{5}\right)$ (v) $\frac{1}{10} + \frac{1}{2} = \frac{3}{5}$

4. Find the difference between the values of numbers at point A and B



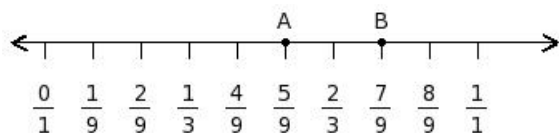
- (i) $\frac{2}{7}$ (ii) $\frac{2}{9}$ (iii) $\frac{2}{5}$ (iv) $\frac{4}{7}$ (v) 0

5. Find the equation representing the following number line diagram



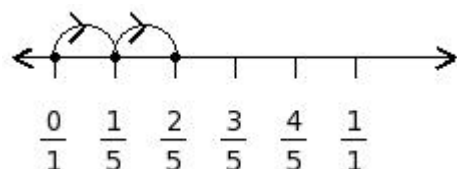
- (i) $\frac{9}{11} - \frac{6}{11} = \frac{3}{11}$ (ii) $\frac{10}{11} + \frac{8}{11} = \frac{18}{11}$ (iii) $\frac{9}{11} - \frac{9}{11} = 0$
 (iv) $\frac{1}{1} - \frac{6}{11} = \frac{5}{11}$ (v) $\frac{8}{11} + \frac{6}{11} = \frac{14}{11}$

6. Find the difference between the values of numbers at point A and B



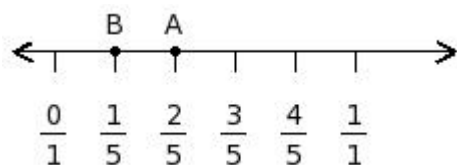
- (i) $(\frac{-2}{9})$ (ii) 0 (iii) $(\frac{-2}{11})$ (iv) $(\frac{-4}{9})$ (v) $(\frac{-2}{7})$

7. Find the equation representing the following number line diagram



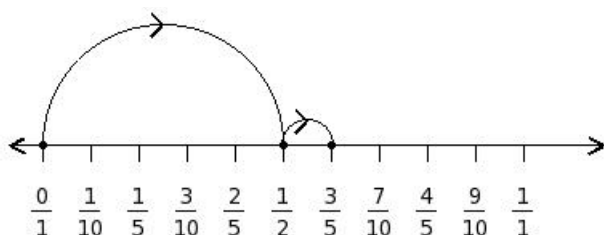
- (i) $\frac{1}{5} + \frac{1}{5} = \frac{2}{5}$ (ii) $\frac{1}{5} - \frac{4}{5} = (\frac{-3}{5})$ (iii) $\frac{3}{5} - \frac{1}{5} = \frac{2}{5}$
 (iv) $0 + \frac{1}{5} = \frac{1}{5}$ (v) $\frac{2}{5} + \frac{3}{5} = \frac{1}{1}$

8. Find the difference between the values of numbers at point A and B



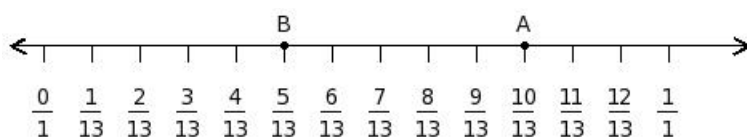
- (i) $\frac{1}{7}$ (ii) $\frac{1}{5}$ (iii) $(\frac{-1}{5})$ (iv) $\frac{3}{5}$ (v) $\frac{1}{3}$

9. Find the equation representing the following number line diagram



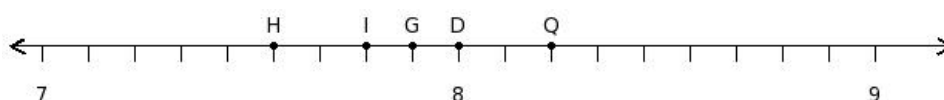
- (i) $\frac{3}{5} + \frac{3}{10} = \frac{9}{10}$ (ii) $\frac{7}{10} - \frac{1}{10} = \frac{3}{5}$ (iii) $\frac{1}{2} + \frac{1}{10} = \frac{3}{5}$
 (iv) $\frac{1}{2} - \frac{2}{5} = \frac{1}{10}$ (v) $\frac{2}{5} + \frac{1}{10} = \frac{1}{2}$

10. Find the difference between the values of numbers at point A and B



- (i) $\frac{3}{13}$ (ii) $\frac{7}{13}$ (iii) $\frac{5}{11}$ (iv) $\frac{1}{3}$ (v) $\frac{5}{13}$

11. Find the position of the rational number $\frac{71}{9}$ on the number line



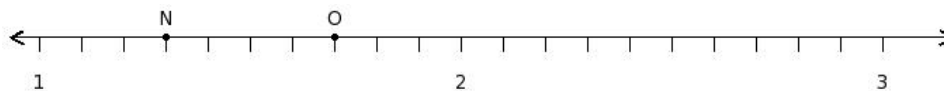
- (i) Q (ii) H (iii) G (iv) D (v) I

12. Find the rational number at the point labelled with letter P



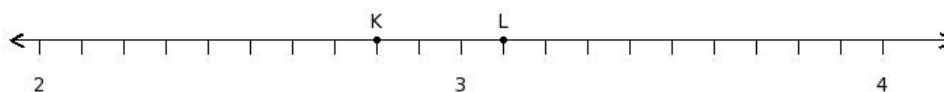
- (i) 5 (ii) $\frac{23}{7}$ (iii) $\frac{27}{7}$ (iv) $\frac{25}{9}$ (v) $\frac{25}{7}$

13. Find the sum of the rational numbers at the points labelled with letters N and O



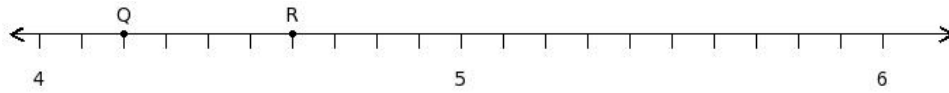
- (i) 3 (ii) 5 (iii) 0 (iv) 2 (v) 4

14. Find the difference of the rational numbers at the points labelled with letters K and L



- (i) $\frac{3}{8}$ (ii) $\frac{1}{4}$ (iii) $\frac{1}{2}$ (iv) $\frac{1}{10}$ (v) $\frac{3}{10}$

15. Find the product of the rational numbers at the points labelled with letters Q and R



- (i) $\frac{97}{5}$ (ii) $\frac{481}{25}$ (iii) $\frac{521}{27}$ (iv) $\frac{445}{23}$ (v) $\frac{483}{25}$
-

Assignment Key

- 1) (iv)
- 2) (iii)
- 3) (v)
- 4) (i)
- 5) (i)
- 6) (i)
- 7) (i)
- 8) (ii)
- 9) (iii)
- 10) (v)
- 11) (iii)
- 12) (v)
- 13) (i)
- 14) (v)
- 15) (v)